


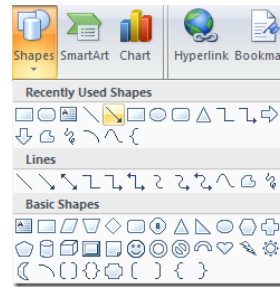
# Acknowledgements

borders by:



[Graphics from the Pond](http://frompond.blogspot.com)

fonts by:



[Microsoft Word](#)

graphics by:



[Creative Clips](#)



Follow, Tweet, Pin & Share!!!



TPT Store



Thank you for  
downloading!






[www.theteachertreasury.com](http://www.theteachertreasury.com)


Name \_\_\_\_\_

Date \_\_\_\_\_

# Free Refills!

These restaurants offer free refills when customers buy a beverage with their meals. This pictograph shows the number of drinks sold at each place. Use the chart to answer the following questions.

Restaurant	Number of Drinks Sold
Tasty Taco	
Corner Burger	
Paul's Pizza	
Chicken Hut	
Pasta Dreams	

Each  = 100 drinks

1. How many drinks did Tasty Taco and Paul's Pizza sell combined?

- A. 70
- B. 700
- C. 7
- D. 170

2. Which place sold the most refills?

- A. Pasta Dreams
- B. Paul's Pizza
- C. Corner Burger
- D. Chicken Hut

3. Corner Burger and Pasta Dreams sold the same amount of drinks.

- A. True
- B. False

4. Which restaurant sold the fewest amount of refills?

- A. Tasty Taco
- B. Corner Burger
- C. Paul's Pizza
- D. Pasta Dreams

5. How many drinks did Chicken Hut sell?

- A. 900
- B. 999
- C. 90
- D. 9

6. What is the difference in the number of drinks sold between Pasta Dreams and the Paul's Pizza?

- A. 4
- B. 40
- C. 440
- D. 400

7. Who sold 600 beverages?

- A. Chicken Hut
- B. Pasta Dreams
- C. Tasty Taco
- D. Corner Burger

8. How many drinks did each restaurant sell?

- \_\_\_\_\_ Chicken Hut
- \_\_\_\_\_ Corner Burger
- \_\_\_\_\_ Pasta Dreams
- \_\_\_\_\_ Pauls' Pizza
- \_\_\_\_\_ Tasty Taco

9. Pasta Dreams sold 200 more drinks than Chicken Hut.

- A. True
- B. False

10. How many drinks did Corner Burger and Paul's Pizza sell all together?

- A. 9
- B. 90
- C. 900
- D. 99