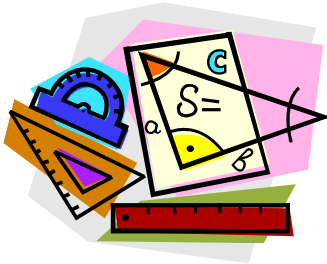
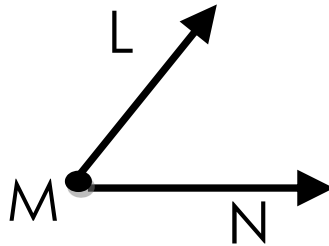


Name \_\_\_\_\_

Date \_\_\_\_\_



# Math Review: Angles and Shapes



1. What is the name of this angle?      2. What is another name for this angle?

\_\_\_\_\_

\_\_\_\_\_

3. What is the name of the vertex of this angle? \_\_\_\_\_

4. Is this a right angle? \_\_\_\_\_

5. Name the 2 rays of this angle. \_\_\_\_\_

6. Draw angle RMD: \_\_\_\_\_

7. Draw Right Angle UFT: \_\_\_\_\_

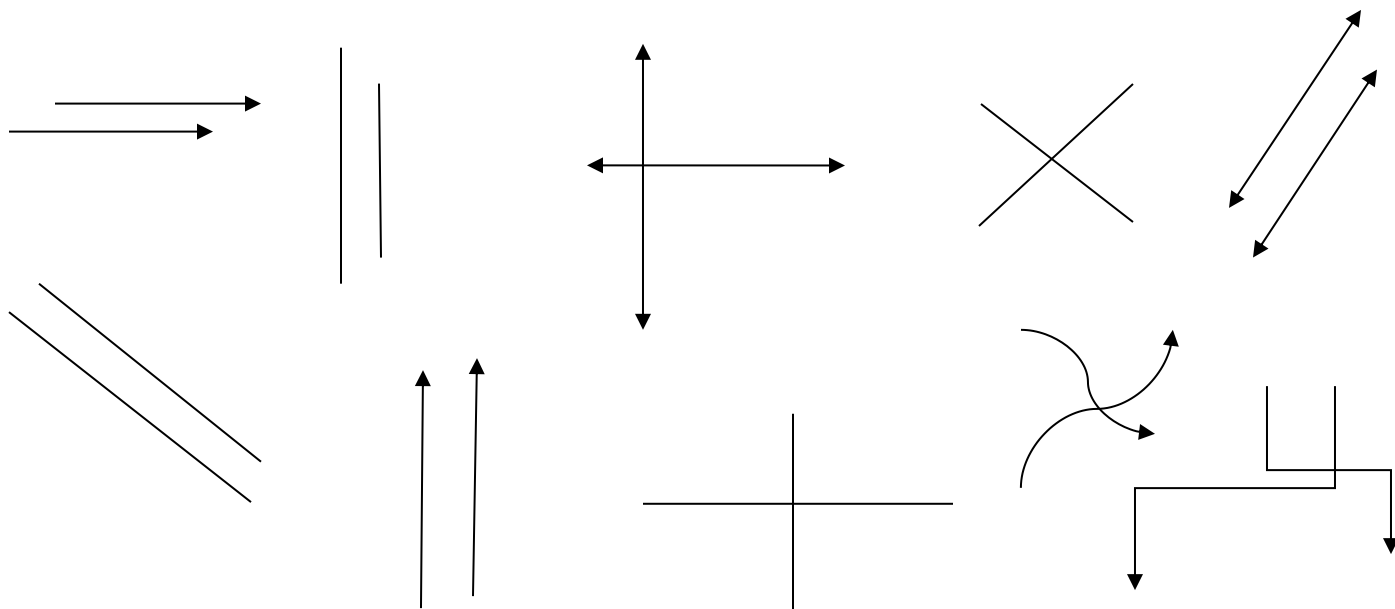
8. Draw 3 quadrangle shapes: \_\_\_\_\_

\_\_\_\_\_

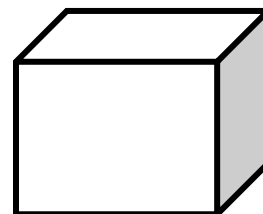
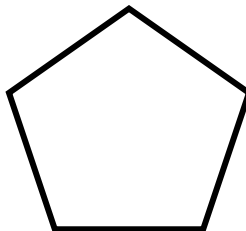
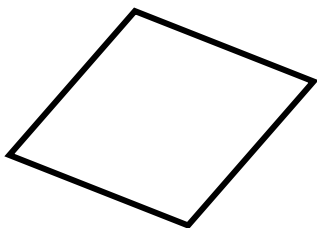
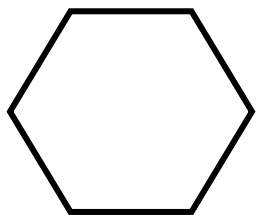
\_\_\_\_\_

\_\_\_\_\_

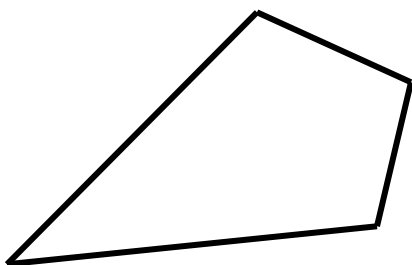
**Directions:** Circle the perpendicular lines.



**Directions:** Name the following shapes and write the number of sides.



\_\_\_\_\_



\_\_\_\_\_

\_\_\_\_\_