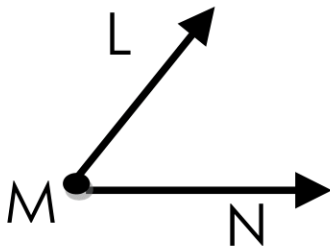


Name _____

Date _____



Math Review: Angles and Shapes



1. What is the name of this angle? 2. What is another name for this angle?

3. What is the name of the vertex of this angle? _____

4. Is this a right angle? _____

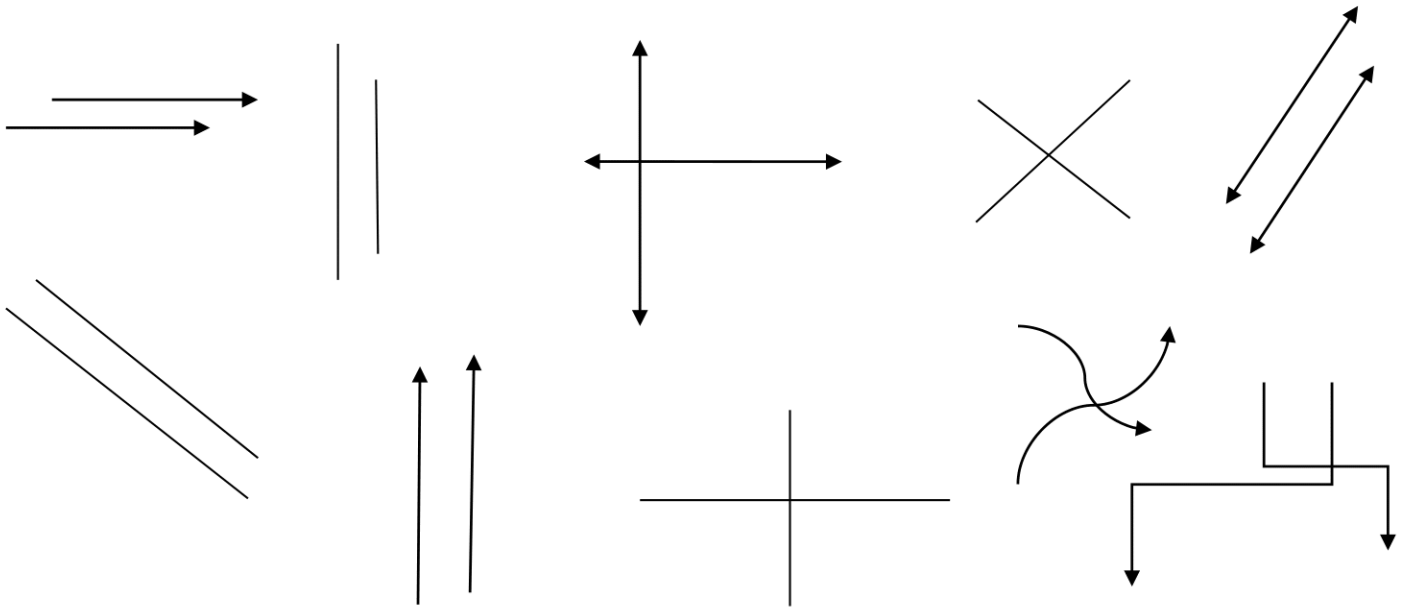
5. Name the 2 rays of this angle. _____

6. Draw angle RMD: _____

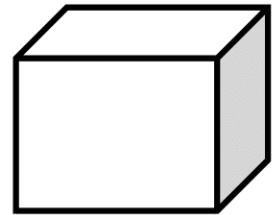
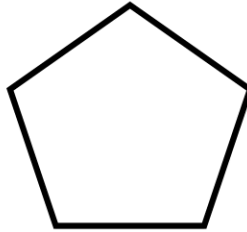
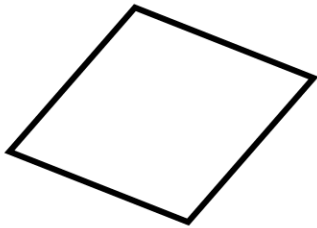
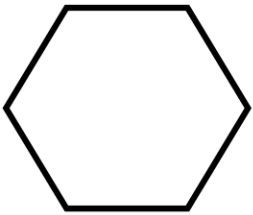
7. Draw Right Angle UFT: _____

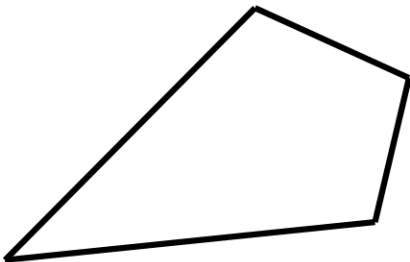
8. Draw 3 quadrangle shapes: _____

Directions: Circle the perpendicular lines.



Directions: Name the following shapes and write the number of sides.





ACKNOWLEDGEMENTS

Borders, fonts, and graphics by



Canva



Microsoft Office
WORD



FOLLOW
US!

Follow, Tweet, Pin, & Share!



Thank you for downloading!

www.TheTeacherTreasury.com





**HELP US
GROW**

Please take a moment to
tell other educators about
our website and resources.



www.TheTeacherTreasury.com

We appreciate your support!