

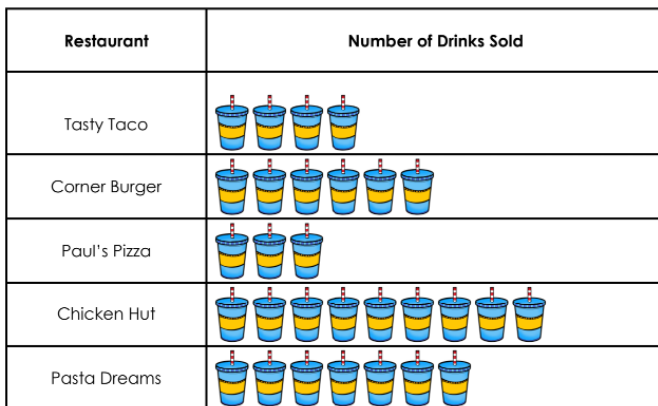
READING PICTOGRAPHS


Free Refills!

Name _____ Date _____

Free Refills!

These restaurants offer free refills when customers buy a beverage with their meals. This pictograph shows the number of drinks sold at each place. Use the chart to answer the following questions.



Each  = 100 drinks

- How many drinks did Tasty Taco and Paul's Pizza sell combined?
A. 70
B. 700
C. 7
D. 170
- Which place sold the most refills?
A. Pasta Dreams
B. Paul's Pizza
C. Corner Burger
D. Chicken Hut









Name _____

Date _____

Free Refills!

These restaurants offer free refills when customers buy a beverage with their meals. This pictograph shows the number of drinks sold at each place. Use the chart to answer the following questions.

Restaurant	Number of Drinks Sold
Tasty Taco	
Corner Burger	
Paul's Pizza	
Chicken Hut	
Pasta Dreams	

Each  = 100 drinks

1. How many drinks did Tasty Taco and Paul's Pizza sell combined?

- A. 70
- B. 700
- C. 7
- D. 170

2. Which place sold the most refills?

- A. Pasta Dreams
- B. Paul's Pizza
- C. Corner Burger
- D. Chicken Hut

3. Corner Burger and Pasta Dreams sold the same amount of drinks.

- A. True
- B. False

4. Which restaurant sold the fewest amount of refills?

- A. Tasty Taco
- B. Corner Burger
- C. Paul's Pizza
- D. Pasta Dreams

5. How many drinks did Chicken Hut sell?

- A. 900
- B. 999
- C. 90
- D. 9

6. What is the difference in the number of drinks sold between Pasta Dreams and the Paul's Pizza?

- A. 4
- B. 40
- C. 440
- D. 400

7. Who sold 600 beverages?

- A. Chicken Hut
- B. Pasta Dreams
- C. Tasty Taco
- D. Corner Burger

8. How many drinks did each restaurant sell?

- _____ Chicken Hut
- _____ Corner Burger
- _____ Pasta Dreams
- _____ Pauls' Pizza
- _____ Tasty Taco

9. Pasta Dreams sold 200 more drinks than Chicken Hut.


- A. True
- B. False

10. How many drinks did Corner Burger and Paul's Pizza sell all together?

- A. 9
- B. 90
- C. 900
- D. 99

ACKNOWLEDGEMENTS

Borders, fonts, and graphics by



Follow, Tweet, Pin, & Share!



Thank you for downloading!

www.TheTeacherTreasury.com



HELP US GROW



Please take a moment to tell other educators about our website and resources.

www.TheTeacherTreasury.com

**We appreciate
your support!**

