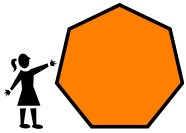
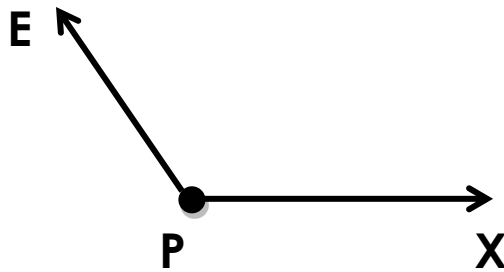



Name _____

Date _____



Angles, Shapes and Parallel Lines



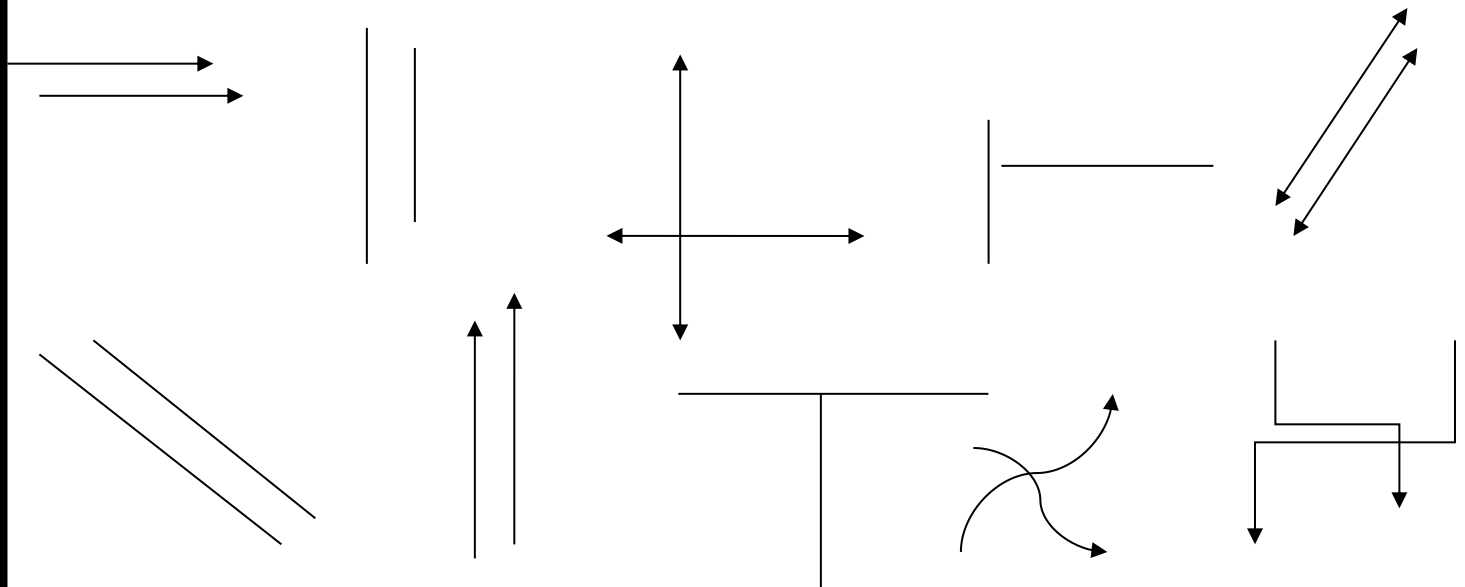
What is the name of this angle? _____

What is the name of the vertex of this angle? _____

This is a(n): **a.** obtuse angle **b.** acute angle **c.** right angle

Name the 2 rays of this angle: _____ and _____

Circle the parallel lines.

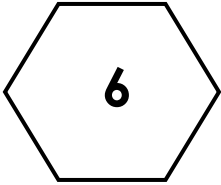


Name the following shapes using the word bank.

Then write down the number of sides inside the shape.

Word Bank

circle square ~~hexagon~~ rectangle kite oval
pentagon rhombus trapezoid octagon triangle



hexagon



